




# Using A.M. and P.M.

I can use a.m. and p.m. to say whether things happen before or after noon.



1) Convert these digital times into analogue times. One has been done for you.

a)




*11 o'clock*

b)



c)



d)




e)



f)



g)



h)



i)





2) Say whether these events could be a.m., p.m. or both. Write a.m., p.m. or both.

a) Coming home from school \_\_\_\_\_

b) Eating your breakfast \_\_\_\_\_

c) Having a shower \_\_\_\_\_


d) Going to bed \_\_\_\_\_

e) Brushing your teeth \_\_\_\_\_

f) Going shopping \_\_\_\_\_

g) The sun coming up \_\_\_\_\_

h) The sun going down \_\_\_\_\_



3) Write these school times in digital form using a.m. and p.m. One has been done for you.

school starts	9 o'clock	9 a.m.
maths	quarter past 9	
reading	quarter past 10	
playtime	half past 10	
literacy	quarter to 11	
lunch time	quarter past 12	
P.E.	1 o'clock	
history	quarter to 2	
French	half past 2	
home time	quarter past 3	



# Using A.M. and P.M. Answers

Question	Answer
<b>1. Convert these digital times into analogue times.</b> One has been done for you.	
a.	<i>11 o'clock</i>
b.	<i>half past 12</i>
c.	<i>quarter past 4</i>
d.	<i>8 o'clock</i>
e.	<i>quarter to 4</i>
f.	<i>half past 8</i>
g.	<i>quarter past 11</i>
h.	<i>half past 4</i>
i.	<i>quarter to 6</i>
<b>2. Say whether these events could be a.m., p.m. or both.</b> Write a.m., p.m. or both.	
a.	Coming home from school <i>p.m.</i>
b.	Eating your breakfast <i>a.m.</i>
c.	Having a shower <i>both</i>
d.	Going to bed <i>p.m.</i>
e.	Brushing your teeth <i>both</i>
f.	Going shopping <i>both</i>
g.	The sun coming up <i>a.m.</i>

g.	The sun going down <i>p.m.</i>	
<b>3. Write these school times in digital form using a.m. and p.m. One has been done for you.</b>		
school starts	9 o'clock	<i>9 a.m.</i>
maths	quarter past 9	<i>9:15 a.m.</i>
reading	quarter past 10	<i>10:15 a.m.</i>
play time	halfpast 10	<i>10:30 a.m.</i>
literacy	quarter to 11	<i>10:45 a.m.</i>
lunch time	quarter past 12	<i>12:15 p.m.</i>
P.E.	1 o'clock	<i>1:00 p.m.</i>
history	quarter to 2	<i>1:45 p.m.</i>
French	half past 2	<i>2:30 p.m.</i>
home time	quarter past 3	<i>3:15 p.m.</i>