



Using A.M. and P.M.

I can use a.m. and p.m. to say whether things happen before or after noon.



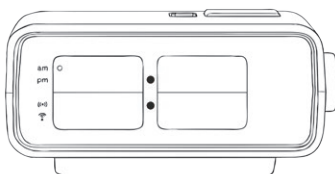
1) Write these times in digital form. One has been done for you.

a)



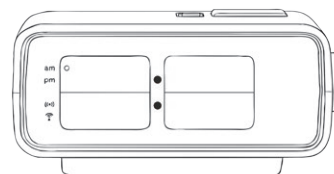
5 past 11

b)



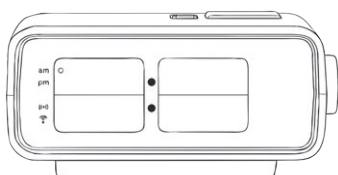
20 to 8

c)



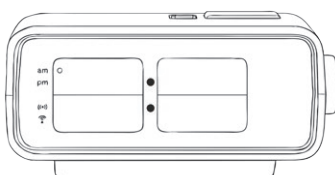
25 past 11

d)



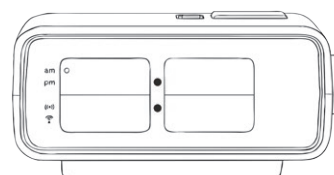
10 to 9

e)



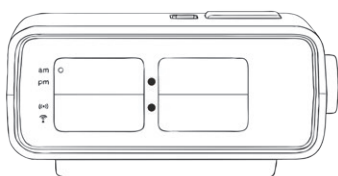
25 to 6

f)



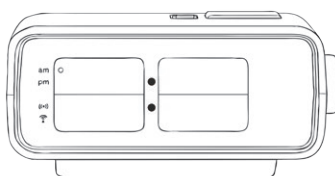
5 past 12

g)



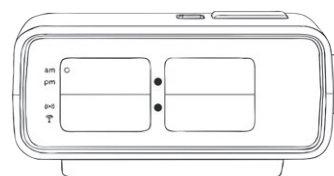
5 to 7

h)



quarter to 4

i)



20 past 11





2) Order these times from the earliest in the day to the latest.

| | | | | | | | |
|-----------|-----------|-----------|------------|-----------|-----------|-----------|------------|
| 2:30 p.m. | 7:10 a.m. | 8:40 p.m. | 12:35 p.m. | 6:50 a.m. | 9:20 a.m. | 9:05 p.m. | 11:15 a.m. |
|-----------|-----------|-----------|------------|-----------|-----------|-----------|------------|

| | | | | | | | |
|----------|---------|--|--|--|--|--|--------|
| earliest | ←—————→ | | | | | | latest |
| | | | | | | | |

3) Write these school times in digital form, using a.m. and p.m. One has been done for you.

| | | |
|---------------|---------------|------------------|
| school starts | 5 past 9 | <i>9:05 a.m.</i> |
| literacy | 10 past 9 | |
| reading | 20 past 10 | |
| playtime | 25 to 11 | |
| maths | quarter to 11 | |
| lunch time | 5 past 12 | |
| R.E. | 10 to 1 | |
| science | 20 to 2 | |
| Spanish | 25 past 2 | |
| home time | 10 past 3 | |

4) Answer these questions about the school day. Show your working out.

a) How long does maths last? _____

b) How long does Spanish last? _____

c) How long does lunch time last? _____



Using A.M. and P.M. Answers

| Question | Answer |
|---|--|
| 1. Write these times in digital form. One has been done for you. | |
| a. | 11:05 |
| b. | 7:40 |
| c. | 11:25 |
| d. | 8:50 |
| e. | 5:35 |
| f. | 12:05 |
| g. | 6:55 |
| h. | 3:45 |
| i. | 11:20 |
| 2. Order these times from the earliest in the day to the latest: | |
| | 6:50 a.m. 7:10 a.m. 9:20 a.m. 11:15 a.m. 12:35 p.m. 2:30 p.m. 8:40 p.m. 9:05 p.m. |

| | | |
|--|--------------------------------|--------------------------|
| 3. Write these school times in digital form, using a.m. and p.m. One has been done for you. | | |
| school starts | 5 past 9 | 9:05 a.m. |
| literacy | 10 past 9 | 9:10 a.m. |
| reading | 20 past 10 | 10:20 a.m. |
| play time | 25 to 11 | 10:35 a.m. |
| maths | quarter to 11 | 10:45 a.m. |
| lunch time | 5 past 12 | 12:05 p.m. |
| R.E. | 10 to 1 | 12:50 p.m. |
| science | 20 to 2 | 1:40 p.m. |
| Spanish | 25 past 2 | 2:25 p.m. |
| home time | 10 past 3 | 3:10 p.m. |
| 4. Answer these questions about the school day. Show your working out: | | |
| a. | How long does maths last? | 1 hour 20 minutes |
| b. | How long does Spanish last? | 45 minutes |
| c. | How long does lunch time last? | 45 minutes |