


Cut these images out to make a poster and add:

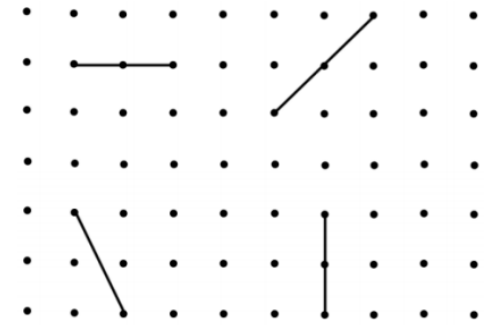
- Two facts of your own that you can show
- An explanation of an Acute, Obtuse and Right Angle

How many right angles can you see in this image?




Can you create your own image with the same number of right angles?

Draw a line along the dots to make a right-angle with each of these lines:



True or False?

This shape has two right-angles.



Explain your answer.