

Year 1 Spring 2 Maths Activity Mat 2

Section 1

Which day comes next?

Friday, Saturday, Sunday,

Section 2

What number is five more than 6?


Section 3

Fill in the missing number.

4, 6, 8, 10, , 14

Section 4

Circle half of the apples.



Section 5

$8 + 4 =$

$4 \times 2 =$

$8 - 5 =$

Section 6

Tick the coins that would make 8p.




Section 7

12 is two less than...

Section 8

Which is heavier?



Year 1 Spring 2 Maths Activity Mat 2 Answers

Section 1

Which day comes next?

Friday, Saturday, Sunday,

Monday

Section 2

What number is five more than 6?

11

Section 3

Fill in the missing number.

4, 6, 8, 10, 12, 14

Section 4

Circle half of the apples.

4 apples circled.

Section 5

$$8 + 4 = 12$$

$$4 \times 2 = 8$$

$$8 - 5 = 3$$

Section 6

Tick the coins that would make 8p.

5p, 2p and 1p ticked.

Section 7

12 is two less than...

14

Section 8

Which is heavier?

robot

Year 1 Spring 2 Maths Activity Mat 2

Section 1

Which day comes first?

Tuesday,

Wednesday, Thursday

Section 2

What number is seven less than 15?


Section 3

Fill in the missing number.

20, 18, 16, , 12

Section 4

Circle half of the apples.



Section 5

$11 + 6 = \square$

$4 \times 10 = \square$

$13 - 6 = \square$

Section 6

Tick the coins that would make 17p.




Section 7

16 is five less than...

Section 8

Which is heavier?



Year 1 Spring 2 Maths Activity Mat 2 Answers

Section 1

Which day comes first?

Monday

Tuesday,

Wednesday, Thursday

Section 2

What number is seven less than 15?

8

Section 3

Fill in the missing number.

20, 18, 16, **14**, 12

Section 4

Circle half of the apples.

6 apples circled.

Section 5

$11 + 6 =$ **17**

$4 \times 10 =$ **40**

$13 - 6 =$ **7**

Section 6

Tick the coins that would make 17p.

10p, 5p and 2p ticked.

or

10p, 5p and 2 x 1p ticked.

Section 7

16 is five less than...

21

Section 8

Which is heavier?

balls

Year 1 Spring 2 Maths Activity Mat 2

Section 1

Which day is four days before Monday?

Section 2

What number is seven less than 15?


Section 3

Fill in the missing number.

25, 30, 35, ,
45, 50

Section 4

Circle half of the apples.



Section 5

$$21 + 25 = \square$$

$$7 \times 5 = \square$$

$$21 - 15 = \square$$

Section 6

Tick the coins that would make 28p.



Section 7

22 is nine less than...

Section 8

Which is heavier, a ball or a robot?



Year 1 Spring 2 Maths Activity Mat 2 Answers

Section 1

Which day is four days before Monday?

Thursday

Section 2

What number is seven less than 15?

8

Section 3

Fill in the missing number.

25, 30, 35, **40**,
45, 50

Section 4

Circle half of the apples.

11 apples circled.

Section 5

$$21 + 25 = \mathbf{46}$$

$$7 \times 5 = \mathbf{35}$$

$$21 - 15 = \mathbf{6}$$

Section 6

Tick the coins that would make 28p.

10p, 10p, 5p, 2p and 1p ticked.

or

10p, 3 x 5p, 2p and 1p ticked.

Section 7

22 is nine less than...

31

Section 8

Which is heavier, a ball or a robot?

robot