


Year 1 Spring 2 Maths Activity Mat 4

Section 1

How many sides do the shapes have altogether?



Section 2

What month comes next?

May, June, July,



Section 3

$$\square - 5 = 4$$


Section 4

Put a ring around the even numbers.

7, 9, 12, 4, 8, 11

Section 5

Emily gave four friends 2 biscuits each. How many biscuits did she give altogether?



Section 6

$$30 + 40 = \square$$

Section 7

Draw two more flowers.


How many flowers are there altogether?



Section 8

What number comes next?

2, 4, 6, 8, 10,



Year 1 Spring 2 Maths Activity Mat 4 Answers

Section 1

How many sides do the shapes have altogether?

8

Section 2

What month comes next?

May, June, July,

August

Section 3

$$9 - 5 = 4$$

Section 4

Put a ring around the even numbers.

7, 9, 12, 4, 8, 11

Section 5

Emily gave four friends 2 biscuits each. How many biscuits did she give altogether?

8

Section 6

$$30 + 40 = 70$$

Section 7

Draw two more flowers.

How many flowers are there altogether?

10

Section 8

What number comes next?


2, 4, 6, 8, 10,

12

Year 1 Spring 2 Maths Activity Mat 4

Section 1

How many sides do the shapes have altogether?



Section 2

What month comes next?

October, November,
December,

Section 3

$$\square - 7 = 6$$


Section 4

Put a ring around the even numbers.

14, 8, 13, 21, 18, 15

Section 5

Mahmood gave seven friends 2 biscuits each. How many biscuits did he give altogether?



Section 6

$$20 + 50 + 20 =$$

Section 7

Draw five more flowers.

How many flowers are there altogether?



Section 8

What number comes next?

22, 24, 26, 28,

Year 1 Spring 2 Maths Activity Mat 4 Answers

Section 1

How many sides do the shapes have altogether?

11

Section 2

What month comes next?

October, November,
December,

January

Section 3

$$13 - 7 = 6$$

Section 4

Put a ring around the even numbers.

14, 8, 13, 21, 18, 15

Section 5

Mahmood gave seven friends 2 biscuits each. How many biscuits did he give altogether?

14

Section 6

$$20 + 50 + 20 =$$

90

Section 7

Draw five more flowers.

How many flowers are there altogether?

12

Section 8

What number comes next?


22, 24, 26, 28,

30

Year 1 Spring 2 Maths Activity Mat 4

Section 1

How many sides do the shapes have altogether?



Section 2

What month comes first?

March,
April, May

Section 3

$$\square - 13 = 18$$

Section 4

Put a ring around the even numbers.

23, 39, 42, 35, 84, 48

Section 5


Jaime gave eight friends 2 biscuits each. How many biscuits did she give altogether?

Section 6

$$70 + 50 + 30 =$$

Section 7

If five flowers were cut, how many flowers would be left?



Section 8

What number comes next?

50, 55, 60, 65, 70,

Year 1 Spring 2 Maths Activity Mat 4 Answers

Section 1

How many sides do the shapes have altogether?

15

Section 2

What month comes first?

February March,

April, May

Section 3

$$31 - 13 = 18$$

Section 4

Put a ring around the even numbers.

23, 39, 42, 35, 84, 48

Section 5

Jaime gave eight friends 2 biscuits each. How many biscuits did she give altogether?

16

Section 6

$$70 + 50 + 30 =$$

150

Section 7

If five flowers were cut, how many flowers would be left?

9

Section 8

What number comes next?

50, 55, 60, 65, 70,

75