


Year 2

Place Value Assessment

Name _____

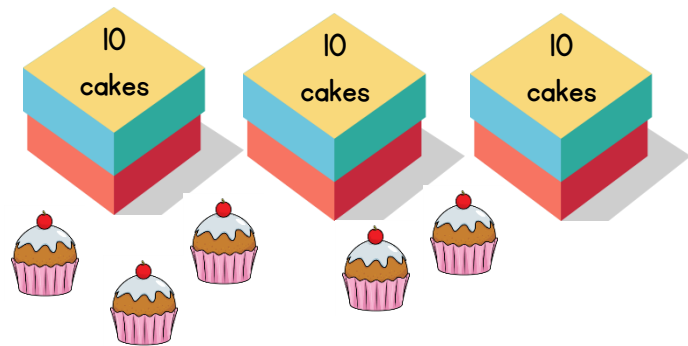


1 How many cookies are there?



1 mark

How many cakes are there altogether?



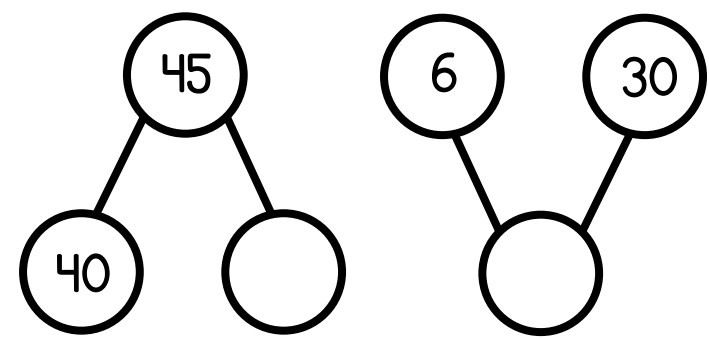
1 mark

2 Match the numerals to the correct word.

- | | |
|----|--------------|
| 13 | Thirty |
| 30 | Thirty-three |
| 33 | Thirteen |

1 mark

3 Complete the part-whole models.



2 marks

4 Circle the greatest number.

- 18 27 33 19 23

1 mark

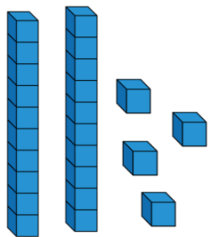
- 5 Complete the boxes to make the statements correct.

1 more than 35 is

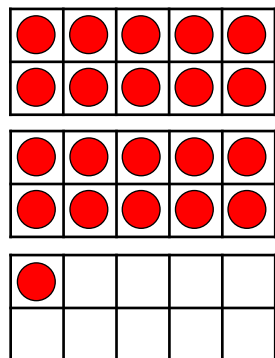
10 less than is 72

- 6 Draw more counters on the ten frame so that Eva's number and Jack's number are equal.

Eva's number

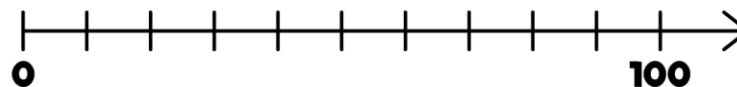


Jack's number



2 marks

- 7 Draw an arrow to show 35 on the number line.



1 mark

- 8 Which word completes the sentence correctly?

more less

3 tens is _____ than 2 tens and 12 ones.

1 mark

Write a number to make the statement correct.

$$32 < \boxed{} < 40$$

1 mark

1 mark

Circle how confident you feel with place value.

1 2 3 4 5
Not Very
confident confident