






Number Game: 11-20





Instructions - Number Game: 11-20

Equipment: Counters, die, question cards, game board.

Place the coloured front and the question cards back to back and laminate.

Cut out the question cards.

Players: 2 – 4.

1. Place the question cards faced down on the question board.
2. Place counters on the start position.
3. Roll the die and move the number of places shown.
4. If the player lands on the question card spot, they must pick up the corresponding colour.
5. The player will follow the instructions on the question card and score points if they get the question correct.
Pink = 1 point Blue = 2 points Green = 3 points Purple = 5 points
6. The next player will take their turn.
7. The winner is the player with the most points.



Pink Question Cards - BACK

What is $10 + 3$?

What is $14 + 3$?

What is $1 + 15$?

What is $1 + 19$?

What is $11 + 7$?

What is $15 + 3$?

What is $2 + 10$?

What is $5 + 15$?

What is $12 + 3$?

What is $1 + 10$?

What is $10 + 4$?

What is $9 + 6$?

What is $13 + 6$?



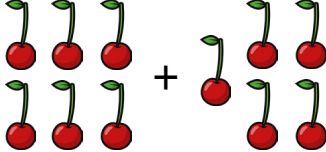



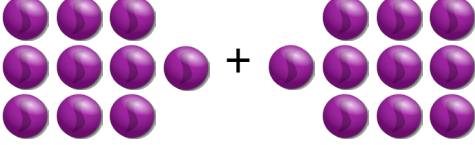


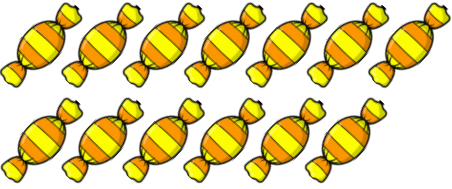

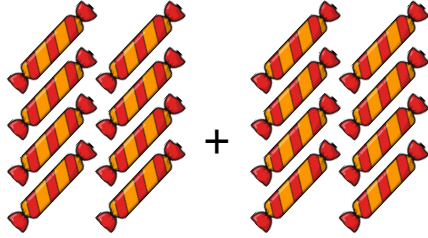


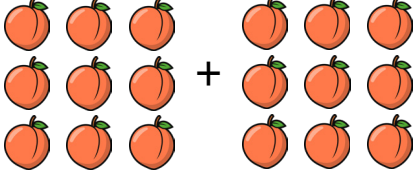

What is $16 + 1$?

What is $11 + 8$?

What is $10 + 6$?

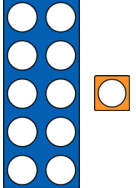
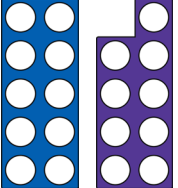
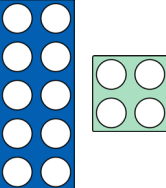









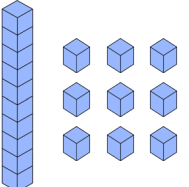
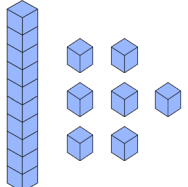
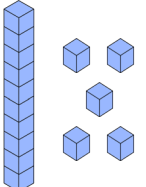
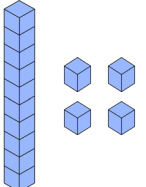


Blue Question Cards - BACK

<p>How many petals are there?</p> 	<p>How many apples are there?</p> 	<p>How many cherries are there altogether?</p> 	<p>How many bees are there altogether?</p> 
<p>How many stickers are there?</p> 	<p>How many doughnuts are there?</p> 	<p>How many marbles are there altogether?</p> 	<p>How many hedgehogs are there altogether?</p> 
<p>How many mushrooms are there?</p> 	<p>How many sweets are there?</p> 	<p>How many teddy bears are there?</p> 	<p>How many sweets are there?</p> 
<p>How many pencils are there?</p> 	<p>How many acorns are there?</p> 	<p>How many peaches are there altogether?</p> 	<p>How many pears are there altogether?</p> 



Green Question Cards - BACK

<p>Count how many.</p> 	<p>Count how many.</p> 	<p>Count how many.</p> 	<p>Count how many.</p> 
<p>Count how many.</p> 	<p>Count how many.</p> 	<p>Count how many.</p> 	<p>Count how many.</p> 
<p>Count how many.</p> 	<p>Count how many.</p> 	<p>Count how many.</p> 	<p>Count how many.</p> 
<p>Count how many.</p> 	<p>Count how many.</p> 	<p>Count how many.</p> 	<p>Count how many.</p> 

Purple Question Cards - FRONT



Purple Question Cards - BACK

What is 1 more than 13?	What is 1 more than 19?	What is 1 more than 16?	What is 1 more than 10?
Which number is the smallest? 19 11 13 16	Which number is the greatest? 17 12 14 18	Which number is the smallest? 15 13 20 16	Which number is the greatest? 12 14 19 13
What comes next? 12, 14, 16, ?	What comes next? 11, 14, 17, ?	What comes next? 19, 17, 15, ?	What comes next? 20, 18, 16, ?
What is 1 less than 12?	What is 1 less than 15?	What is 1 less than 20?	What is 1 less than 17?

Score card

Player 1: _____	Player 2: _____	Player 3: _____	Player 4: _____

Answers - Pink Question Cards

What is $10 + 3$? **13**

What is $14 + 3$? **17**

What is $1 + 15$? **16**

What is $1 + 19$? **20**

What is $11 + 7$? **18**

What is $15 + 3$? **18**

What is $2 + 10$? **12**

What is $5 + 15$? **20**

What is $12 + 3$? **15**

What is $1 + 10$? **11**

What is $10 + 4$? **14**

What is $9 + 6$? **15**

What is $13 + 6$? **19**

What is $16 + 1$? **17**


What is $11 + 8$? **19**

What is $10 + 6$? **16**

Answers - Blue Question Cards - BACK


How many petals are there?

16.

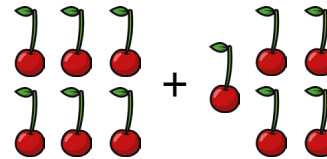


How many apples are there?


19.



How many cherries are there altogether? 11.




How many bees are there altogether? 15.



How many stickers are there?

15.

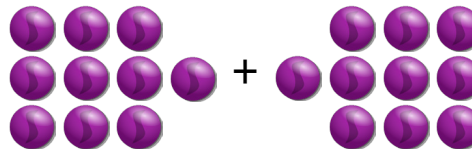


How many doughnuts are there?

12.




How many marbles are there altogether? 20.



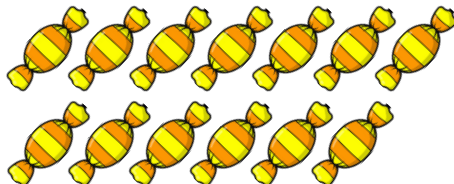
How many hedgehogs are there altogether? 13.




How many mushrooms are there? 20.



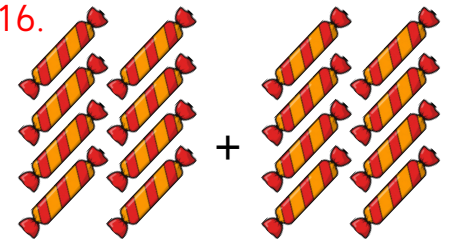
How many sweets are there? 13.




How many teddy bears are there? 12.




How many sweets are there? 16.



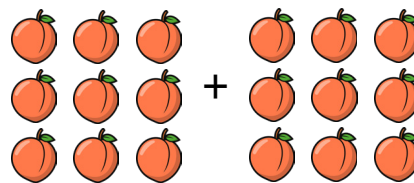
How many pencils are there? 11.




How many acorns are there? 14.



How many peaches are there altogether? 18.

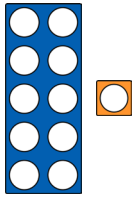


How many pears are there altogether? 15.

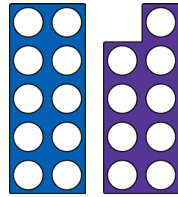


Answers - Green Question Cards

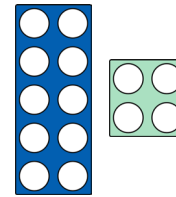
Count how many. 11.



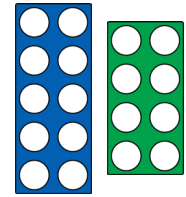
Count how many. 19.



Count how many. 14.



Count how many. 18.



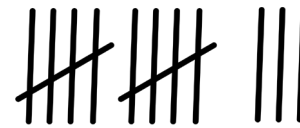
Count how many. 16.



Count how many. 15.




Count how many. 13.



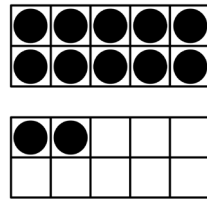
Count how many. 14.




How many? 18.




Count how many. 12.



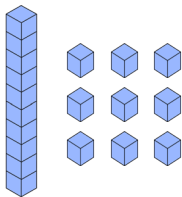
Count how many. 20.



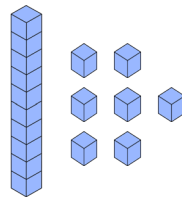
Count how many. 17.



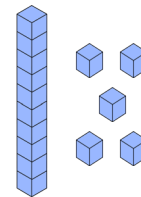
Count how many. 19.



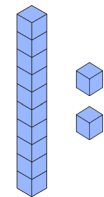
Count how many. 17.



Count how many. 15.



Count how many. 12.



Answers - Purple Question Cards

What is 1 more than 13? 14	What is 1 more than 19? 20	What is 1 more than 16? 17	What is 1 more than 10? 11
Which number is the smallest? 19 11 13 16	Which number is the greatest? 17 12 14 18	Which number is the smallest? 15 13 20 16	Which number is the greatest? 12 14 19 13
What comes next? 12, 14, 16, 18	What comes next? 11, 14, 17, 20	What comes next? 19, 17, 15, 13	What comes next? 20, 18, 16, 14
What is 1 less than 12? 11	What is 1 less than 15? 14	What is 1 less than 20? 19	What is 1 less than 17? 16